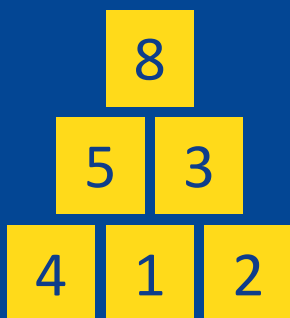



# MATHS ACTIVITY

Maths involves **logical thinking** and **exploring solutions to problems**. Below is an example of a 'nice pyramid'. It is a nice pyramid because it is filled with positive whole numbers, no number is used more than once, and every number is the sum of the two below it. Can you fill in the other two pyramids so that they are 'nice' pyramids? You can use any of the numbers at the sides, but only once!

Example of a  
'nice pyramid'




Puzzle 1



1 2  
3 4  
5 6  
7 8

Puzzle 2



1 2  
3 4  
5 6  
7 8  
9